



Score: _____

Date: _____

Name: _____

$$\begin{array}{r} 9 \\ - 0 \\ \hline \end{array}$$

$$\begin{array}{r} 9 \\ + 6 \\ \hline \end{array}$$

$$\begin{array}{r} 5 \\ + 6 \\ \hline \end{array}$$

$$\begin{array}{r} 7 \\ + 6 \\ \hline \end{array}$$

$$\begin{array}{r} 7 \\ + 5 \\ \hline \end{array}$$

$$\begin{array}{r} 2 \\ + 0 \\ \hline \end{array}$$

$$\begin{array}{r} 9 \\ + 1 \\ \hline \end{array}$$

$$\begin{array}{r} 4 \\ - 2 \\ \hline \end{array}$$

$$\begin{array}{r} 5 \\ - 0 \\ \hline \end{array}$$

$$\begin{array}{r} 9 \\ + 7 \\ \hline \end{array}$$

$$\begin{array}{r} 8 \\ + 2 \\ \hline \end{array}$$

$$\begin{array}{r} 6 \\ + 8 \\ \hline \end{array}$$

$$\begin{array}{r} 0 \\ + 5 \\ \hline \end{array}$$

$$\begin{array}{r} 7 \\ - 3 \\ \hline \end{array}$$

$$\begin{array}{r} 9 \\ - 2 \\ \hline \end{array}$$

$$\begin{array}{r} 8 \\ - 3 \\ \hline \end{array}$$

$$\begin{array}{r} 4 \\ + 3 \\ \hline \end{array}$$

$$\begin{array}{r} 7 \\ - 3 \\ \hline \end{array}$$

$$\begin{array}{r} 4 \\ + 1 \\ \hline \end{array}$$

$$\begin{array}{r} 0 \\ + 9 \\ \hline \end{array}$$

$$\begin{array}{r} 3 \\ - 1 \\ \hline \end{array}$$

$$\begin{array}{r} 6 \\ + 0 \\ \hline \end{array}$$

$$\begin{array}{r} 6 \\ + 9 \\ \hline \end{array}$$

$$\begin{array}{r} 4 \\ + 2 \\ \hline \end{array}$$

$$\begin{array}{r} 9 \\ - 6 \\ \hline \end{array}$$

A Family Helps

Grade 1 - Day 2

A family helps you in many ways.

How does your family help you?

A family takes care of you.

They help keep you clean.

They feed you.


A family teaches you things.

They play with you.

They read to you.

A family helps you when you feel sad.

A family loves you!





Think About It

1. How does a family take care of you?

Write two ways.

a. _____

b. _____

2. What is another good name for “A Family Helps”?



Get Ready

Name the people in your family.

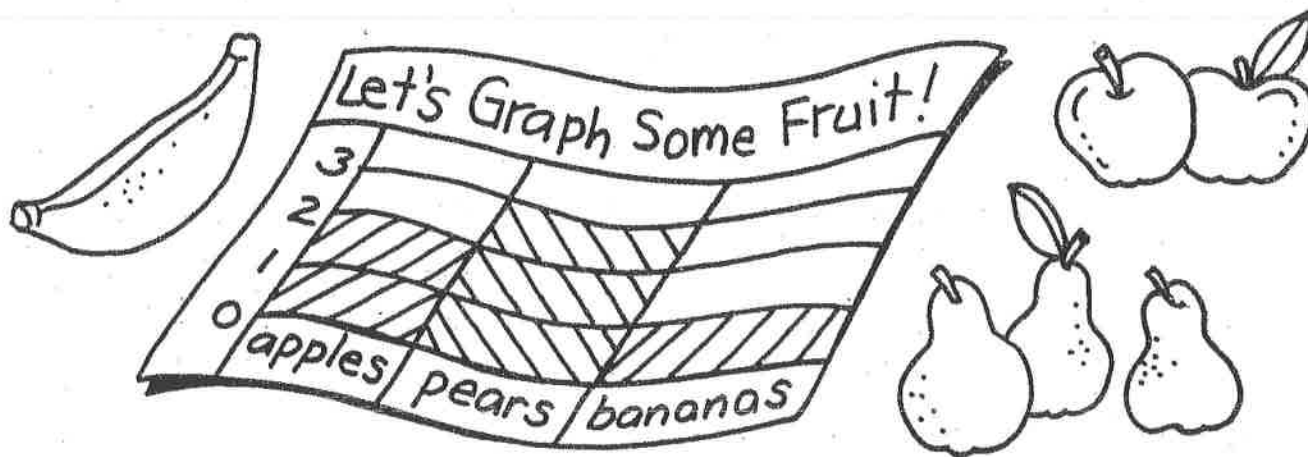


Tell About It

Draw a picture to show how your family helps you.

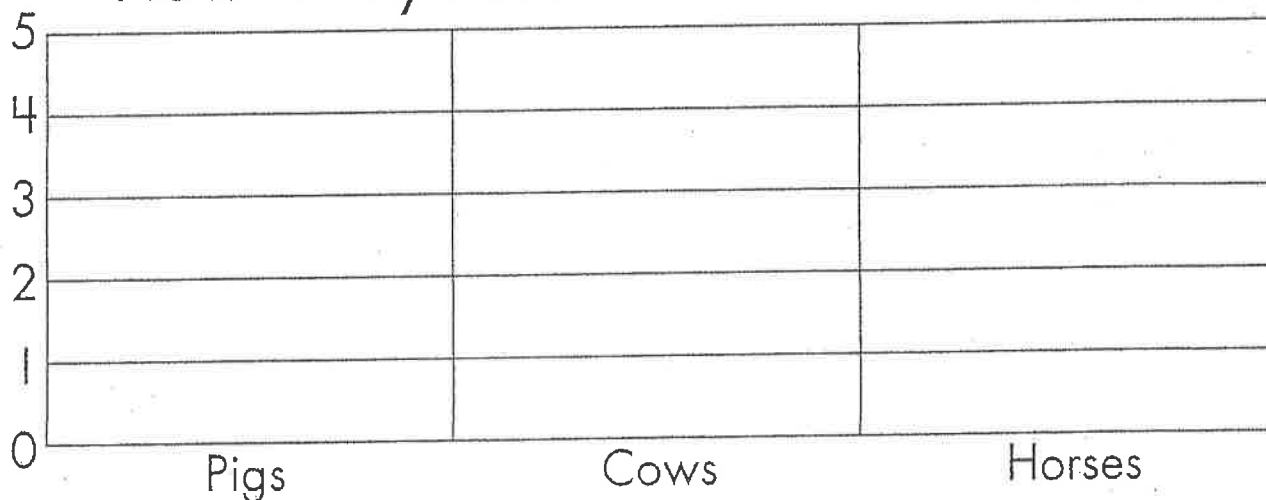
Write the names of the people in the picture.

Graph It!



by _____


How Many Animals Live on the Farm?




How many pigs 🐷 live on the farm? _____

How many horses 🐎 live on the farm? _____

How many cows 🐮 live on the farm? _____




Some animals live on a farm.



Some animals live at a zoo.

How Many Animals Live at the Zoo?



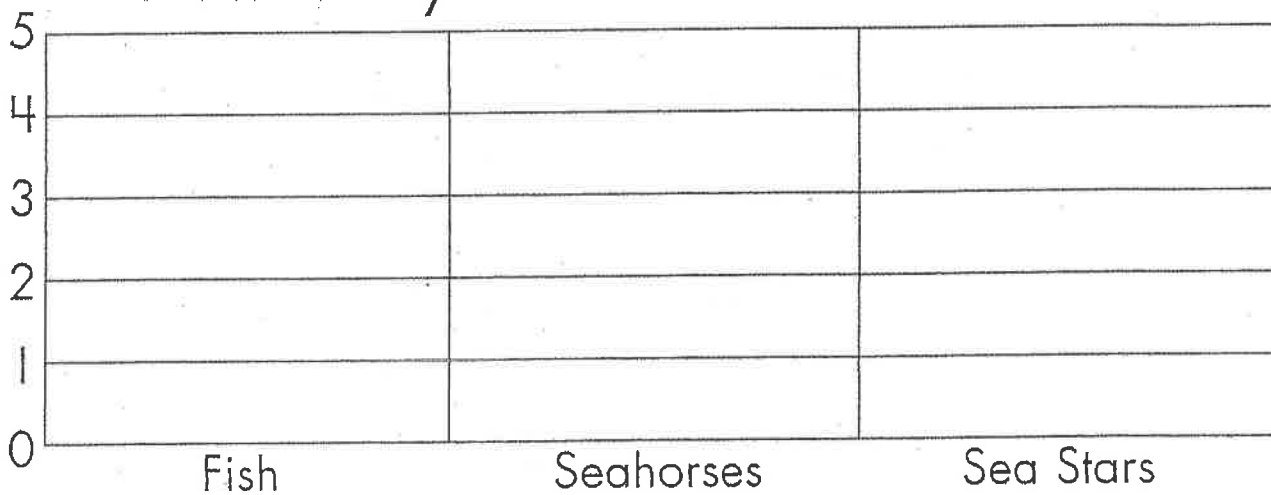
How many monkeys  live at the zoo? _____

How many tigers  live at the zoo? _____

How many elephants  live at the zoo? _____

4

How Many Animals Live in the Sea?




How many fish  live in the sea? _____

How many seahorses  live in the sea? _____


How many sea stars  live in the sea? _____

6



Some animals live in the sea.

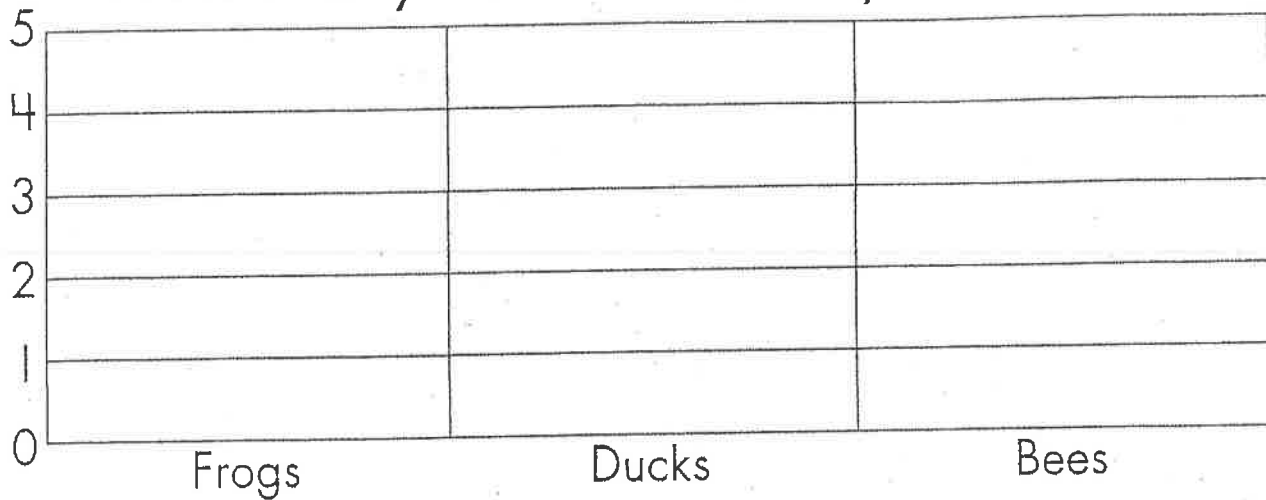
5



Some animals live by a pond.

7

How Many Animals Live by the Pond?




How many frogs  live by the pond? _____

How many ducks  live by the pond? _____

How many bees  live by the pond? _____

8

How Many Animals Live in the Garden?



How many snails  live in the garden? _____

How many ladybugs  live in the garden? _____

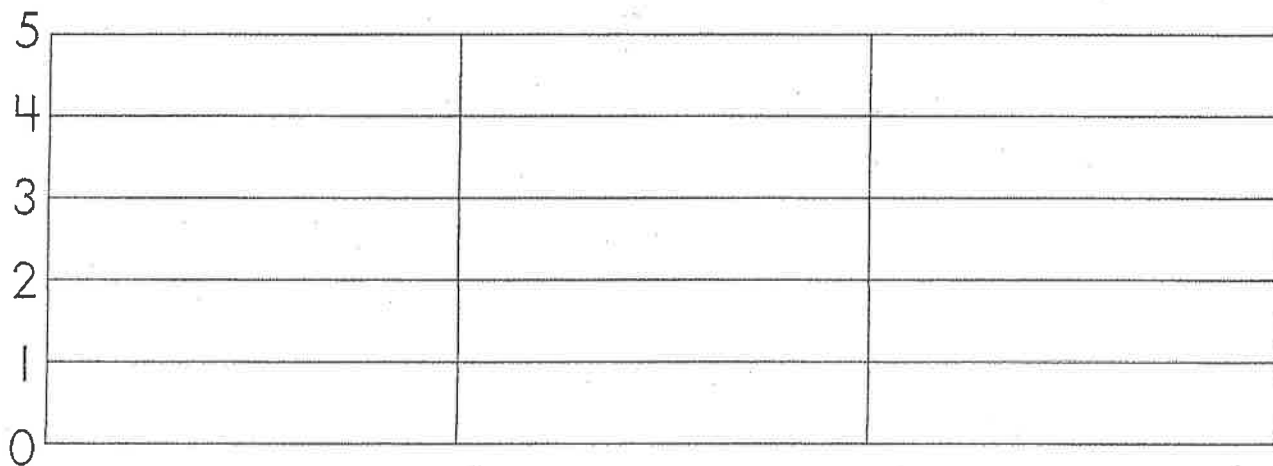
How many birds  live in the garden? _____

10



Some animals live in a garden.

9



I can make my own graph!

11

