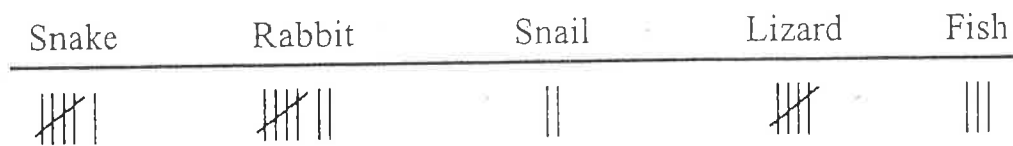

Blizzard Bag
Day 2

Second Grade

Graphic Sources

When you look at a chart, be sure to read the labels and the numbers.
Read the paragraph. Then answer the questions below.

Jed's class was going to buy a pet. Miss Brown wanted the class to decide which kind to buy. The choices were snake, rabbit, snail, lizard, and fish. Everyone voted. This chart shows the votes. The winner is the animal with the most votes.



1 What kind of pet will Miss Brown's class buy?

- lizard
- snail
- snake
- rabbit

2 The best title for this chart is

- We Like Rabbits
- Our Pet Choice
- Miss Brown's Class
- Rabbits, Snakes, and Lizards

3 Which animal was the least favorite?

- snake
- lizard
- fish
- snail

4 Make a list that shows the animals from most favorite to least favorite. Explain how you made the list.

Name: _____

Write a Paragraph About Art


Tell how to paint a picture from beginning to end.
Use words such as first, next, then, and lastly.

Handwriting practice lines for writing a paragraph. Each line set consists of a solid top line, a dashed middle line, and a solid bottom line. There are 10 such sets of lines provided for writing.

Name: _____


Counting Nickels

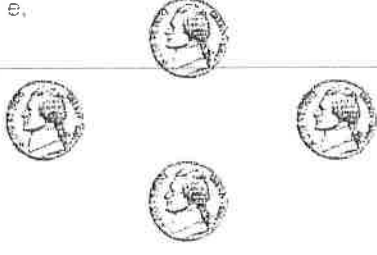
Count the money. Write the amount.

a.  _____ ¢


b.  _____ ¢


c.  _____ ¢


d.  _____ ¢


e.  _____ ¢

f.  _____ ¢

g.  _____ ¢

h.  _____ ¢

i.  _____ ¢

j.  _____ ¢

k.  _____ ¢

Name: _____


2-Digit Addition without Regrouping

Addition

Find the sums.

a.
$$\begin{array}{r} 32 \\ + 15 \\ \hline \end{array}$$

b.
$$\begin{array}{r} 44 \\ + 34 \\ \hline \end{array}$$



c.
$$\begin{array}{r} 41 \\ + 10 \\ \hline \end{array}$$

d.
$$\begin{array}{r} 20 \\ + 29 \\ \hline \end{array}$$

e.
$$\begin{array}{r} 62 \\ + 6 \\ \hline \end{array}$$

f.
$$\begin{array}{r} 72 \\ + 26 \\ \hline \end{array}$$

g.
$$\begin{array}{r} 34 \\ + 23 \\ \hline \end{array}$$

h.
$$\begin{array}{r} 5 \\ + 61 \\ \hline \end{array}$$

i.
$$\begin{array}{r} 54 \\ + 20 \\ \hline \end{array}$$

j.
$$\begin{array}{r} 83 \\ + 16 \\ \hline \end{array}$$

- k. Ken has 25 toy cars.
Tim has 13 toy cars.
How many toy cars do they have altogether? _____

- l. Sara has 34 dolls.
She buys 3 more.
How many dolls does she have in all? _____