


Practice saying letter names.

Alphabet Set 4




		m	N	b	v
c	X	z	L	k	j
H	f	G	D	s	A
p	o	I	Y	t	r
E	w	Q	h	g	J
a	i	K	M	e	F
P	q	n	d	R	W
X	C	u	m	l	t
x	Z	j	p		


Name _____

Opinion Writing

*Note: You may use a highlighter and have your child trace it or have them copy from a model you wrote for them.



or



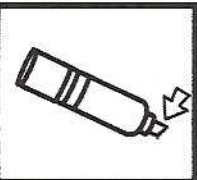
Do you like popsicles or lollipops?


I like


because


Name: _____


Directions: Write in the missing ending sound for each CVC word.


	t	i	
---	---	---	--


	m	a	
--	---	---	--


	p	o	
---	---	---	--

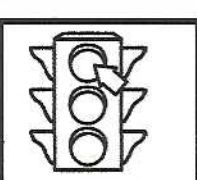
	v	e	
--	---	---	--


	r	a	
--	---	---	--


	g	u	
---	---	---	--


	j	u	
---	---	---	--

	s	i	
--	---	---	--

	r	e	
---	---	---	--

	f	o	
--	---	---	--

	b	u	
---	---	---	--

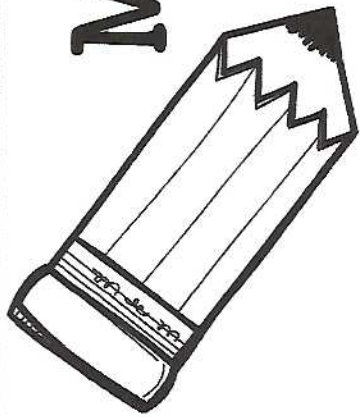
	l	a	
--	---	---	--



Practice reading the words

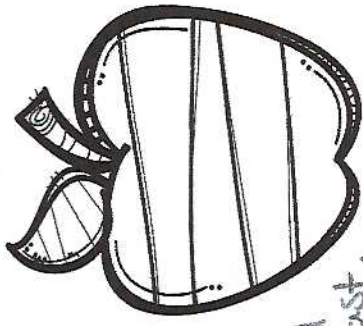
Sight Words Set 1

		I	see	like	can
we	the	see	like	we	I
see	like	can	the	see	we
I	see	can	like	I	the
can	like	I	see	we	the
see	can	like	I	the	see
like	I	the	can	see	the
we	see	the	I	like	see
I	can	like	see		



My teacher likes me to
practice my name!

Practice First and Last.



1.


2.

3.

4.

Read the numbers.

Numbers
Sheet 4



		4	2	10	6
2	9	1	7	8	3
10	5	8	0	3	5
7	4	6	2	5	1
4	0	6	9	5	6
9	1	3	0	7	8
2	7	2	9	4	1
6	4	8	3	5	10
10	3	1	7		

Name _____

Date _____

Writing Numbers 1-20

Name: _____

Date: _____

How Many Stars?

Directions: Count and circle the correct number of items.



11 12 13



13 14 15



12 13 14



11 12 13



12 13 14



13 14 15


Name: _____ Date: _____

Adding Bears

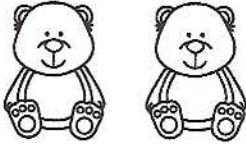
Directions: Add the objects together to find the sum.




+



=




+



=



+




=




+



=



+




=

Name: _____ Date: _____

Subtracting Stars


Directions: Cross out the objects to find the difference.

$5 - 2 =$



Cross out 2 stars.

$5 - 4 =$



Cross out 4 stars.

$4 - 2 =$




Cross out 2 stars.

$4 - 3 =$



Cross out 3 stars.

$5 - 0 =$



Cross out 0 stars.