



Devroll Week 7 K-2 students




Practice saying
letter names.

Alphabet
Set 7


		p	O	i	U
y	T	r	E	w	q
A	I	S	K	d	j
f	H	g	M	Z	n
x	c	V	B	Q	w
e	R	t	y	U	I
o	P	L	a	k	s
J	H	D	f	G	e
Y	d	b	Z		

****Note: You may use a highlighter and have your child trace their response or have them copy from a model you wrote for them.****

Opinion Writing



or




Do you like fries or onion rings?


I like

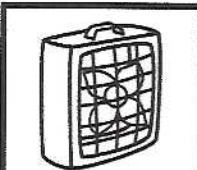
because


Name: _____


Directions: Write in the missing beginning sound for each CVC word.


		u	m
---	--	---	---


		a	g
--	--	---	---


		a	n
---	--	---	---

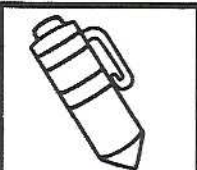
		u	g
--	--	---	---

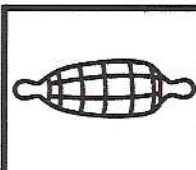
		i	x
--	--	---	---

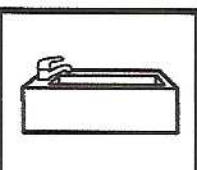
		i	n
---	--	---	---


		o	g
---	--	---	---


		a	t
--	--	---	---

		e	n
---	--	---	---

		o	b
--	--	---	---

		u	b
---	--	---	---

		e	d
--	--	---	---



Practice reading the
Sight words.

Sight Words
Set 4


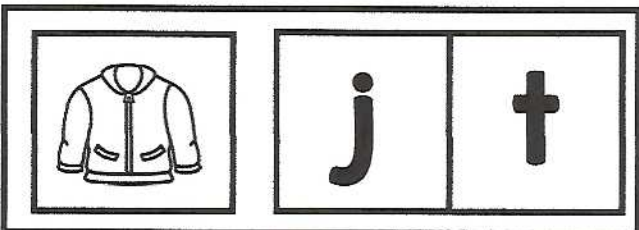


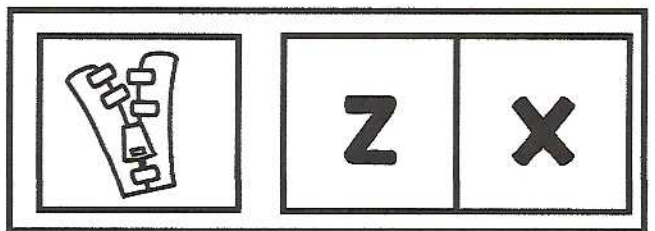

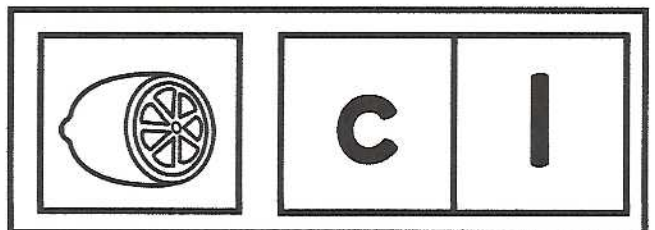

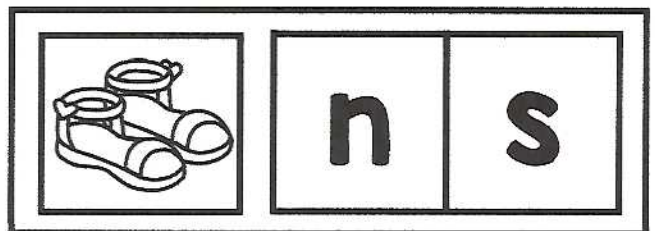
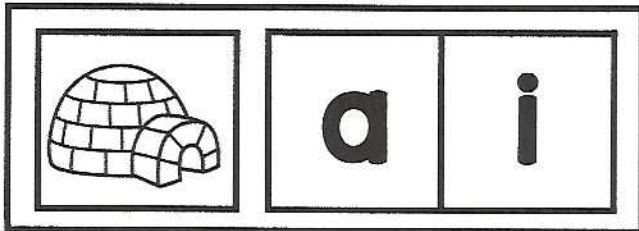
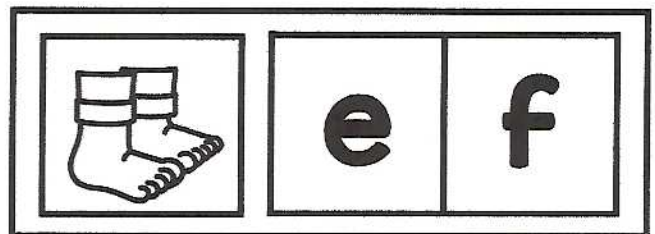

		my	and	a	to
in	and	a	my	to	in
and	my	to	a	in	to
a	in	and	to	my	a
my	to	a	my	in	and
to	and	my	in	a	to
and	to	a	and	in	my
a	my	in	to	and	a
to	and	a	my		

Name: _____

©Tara West




Directions: Color the matching beginning sound.



Practice reading
the numbers

Numbers
Sheet 12



		12	5	16	2
3	11	18	20	10	15
14	4	7	6	19	9
9	12	8	13	6	5
7	3	0	11	8	14
16	10	4	20	18	9
19	0	12	1	17	4
5	13	2	10	3	7
11	6	17	1		

Name _____

Date _____

Writing Numbers 1-20

Name: _____ Date: _____

Adding Buttons

Directions: Add the objects together to find the sum.

$$\begin{array}{c} \text{○} \quad \text{○} \\ \text{●} \quad \text{●} \end{array} + \begin{array}{c} \text{○} \quad \text{○} \\ \text{●} \quad \text{●} \end{array} = \square$$

$$\begin{array}{c} \text{○} \\ \text{●} \end{array} + \begin{array}{c} \text{○} \quad \text{○} \quad \text{○} \\ \text{●} \quad \text{●} \quad \text{●} \end{array} = \square$$

$$\begin{array}{c} \text{○} \\ \text{●} \end{array} + \begin{array}{c} \text{○} \\ \text{●} \end{array} = \square$$

$$\begin{array}{c} \text{○} \\ \text{●} \end{array} + \begin{array}{c} \text{○} \quad \text{○} \\ \text{●} \quad \text{●} \end{array} = \square$$

$$\begin{array}{c} \text{○} \quad \text{○} \\ \text{●} \quad \text{●} \\ \text{○} \quad \text{○} \quad \text{○} \\ \text{●} \quad \text{●} \quad \text{●} \end{array} + \text{○} = \square$$

Name: _____ Date: _____

Subtracting Bears

Directions: Cross out the objects to find the difference.

$3 - 2 =$



Cross out 2 bears.

$5 - 2 =$




Cross out 2 bears.

$5 - 1 =$




Cross out 1 bear.

$4 - 4 =$



Cross out 4 bears.

$4 - 2 =$



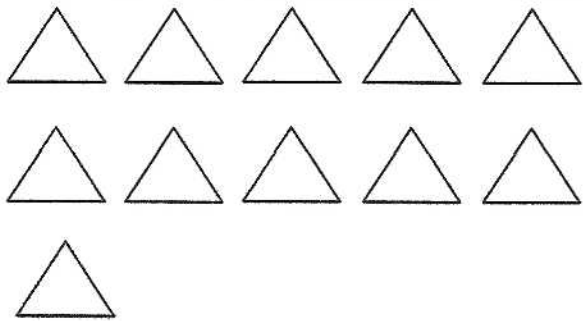
Cross out 2 bears.

Name: _____

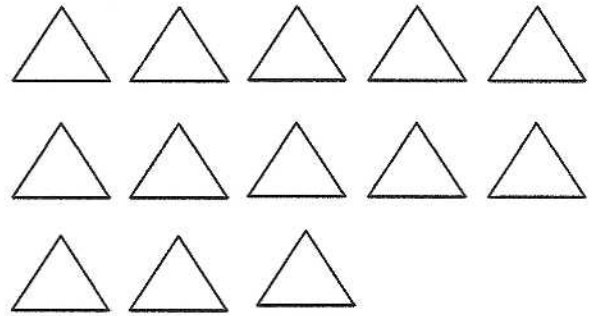
Date: _____

How Many Triangles?

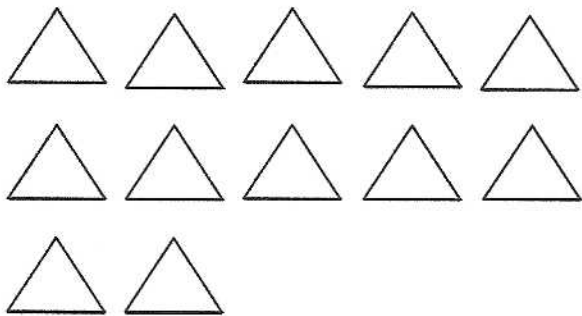
Directions: Count and circle the correct number of items.



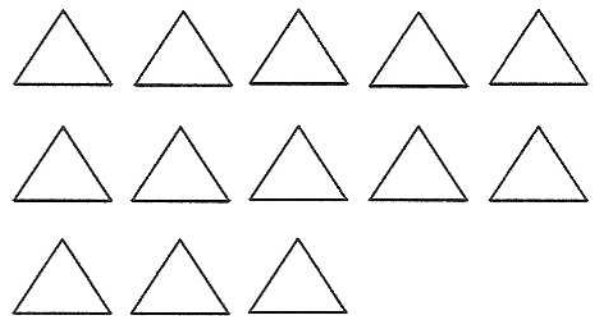
11 12 13




13 14 15




12 13 14



11 12 13



12 13 14



13 14 15